





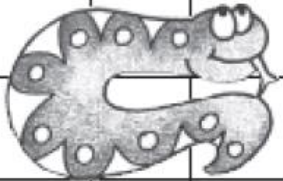

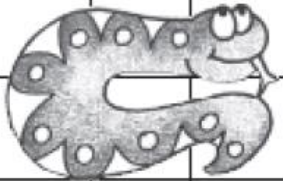

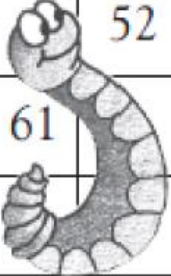

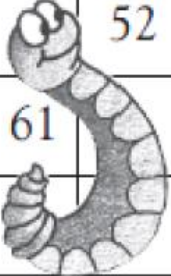



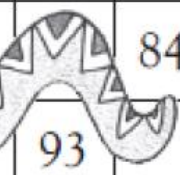

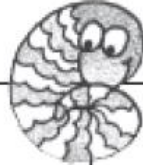

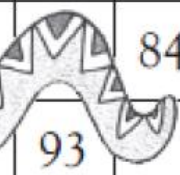

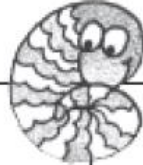




Quels nombres sont cachés par les serpents ? Complète.

1	2	3	4	5		7	8	9	
11	12	13		15		18	19		
21	22	23	24		26	27	28		
31				35	36		38	39	40
41				45		47	48	49	50
	52	53	54	55		57	58	59	60
61		63	64	65				69	70
		73	74		76	77	78	79	80
81	82		84				88		
		93		95	96		98		

6	
16	17

	
--	---------------------------------------------------------------------------------------

